

NTI
DAY FIVE

2nd Grade: Mrs. Sexton & Ms. Mayberry

Lesson #5

Trust Part 1

Terra was usually the first to get to school. She took the early bus, so she was always there about 20 minutes before the other kids in her class. But that was okay. Terra spent her extra time helping Ms. Jenkins get ready for the day. She loved helping her teacher.

One day, Terra arrived at school even earlier than usual. Ms. Jenkins pointed to a stack of papers on her desk. She asked Terra to hang them in the hallway. Terra loved this job! Each perfect paper had a holiday sticker on top. She grabbed the papers and got



to work right away. Terra carefully hung all of the papers. She hung them in a straight, neat row. But the last one didn't look like the others. It was a copy of the science test. The class would be taking the test after lunch. This copy had the answers in red ink. Terra stared at the paper. Her eyes landed on each red word. She had studied these words last night. *Oh no*, she thought. *Why am I reading this?*

Now what would she do? Terra had seen the answers. Should she tell Ms. Jenkins or just put it back on the teacher's desk when she wasn't looking? Terra didn't want her teacher to think she tried to get the answers on purpose. Would Ms. Jenkins believe it was an accident?

Terra waited for Ms. Jenkins to leave the room. Quickly, she went to the teacher's desk and slipped the test under some other papers. After that, she sat at her own desk and began to read her library book. But it was hard to think about the story. Terra felt a little sick. She had always been truthful. She wanted her teacher to trust her.


- RL.2.1 1. What is Terra's problem at the beginning of this passage?
- A) She got a bad grade on her test.
 - B) She can't remember the words on the science test.
 - C) She can't decide whether she should be truthful.
- RL.2.3 2. Which words describe Terra when she talks with Ms. Jenkins?
- brave nervous uneasy cheerful truthful
- CCRA.R.1 3. Why is the title of the story "Trust"?
- A) Terra learns an important lesson about trust.
 - B) Terra feels uneasy about trusting others.
 - C) Trust is the name of Terra's school.
- L.2.4 4. Which word means the same as the underlined word?
- She just couldn't stand the uneasy feeling.
- hard slow troubled calm
- RL.2.3 5. How is Terra feeling at the end of the story?
-
-
-

- CCRA.R.1 6. Draw a line under some words in the text that support your answer to item 5.


Lesson #5

1. Circle each word that begins with the letter **k**. Write the word **kitten** on the line below.


Is the kitten in the kitchen?





2. Draw a line from the **M** to every picture that ends with the **m** sound.



M



3. Draw a picture of something that rhymes with **rake**.



Lesson #5

Neighborhoods

Wherever you live, there are people who live nearby. These people are your **neighbors**.

The place where you live with your neighbors is a **neighborhood**. In your neighborhood, people may do things together. They may have parties or plant a garden. A neighborhood may have a grocery store, a library, and even a park for picnics, swimming, and playing.



- The place where you live with your neighbors is a _____.
- People in a neighborhood may use nearby places, such as _____.


parks	libraries
schools	all of these
- People who live nearby are _____.
- A _____ is what happens because of something else.

consequence	rule	leader	neighborhood
-------------	------	--------	--------------


Lesson #5

1. Fill in the sign to make this sentence true. $46 \bigcirc 32$ ($<$ or $>$)

2. Write the time that is shown on the clock.




3. $9 + 8 = ?$

4. What is the name of this shape? 

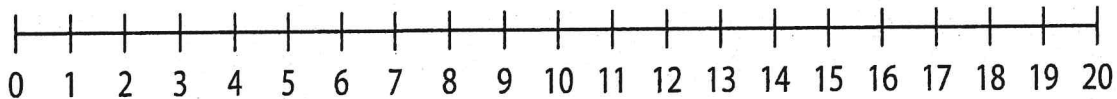
5. Study the number sentence. In your answer box, write the number that the symbol stands for. $16 - \star = 10$

6. What number comes right after 79? 79, _____

7. Write the word for the number of circles in the group.



8. Use the number line to add $15 + 4$. Start at 15 and move 4 places to the right. The sum is _____.



9. $16 - 8 = ?$

10. The number 69 has _____ tens and _____ ones.

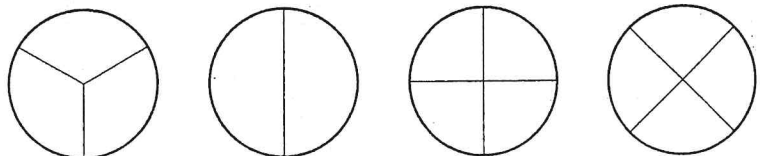
11. There are 7 bluebirds in one tree and 3 robins in another tree. How many birds are there in all?



12. What number comes next? 11, 12, 13, _____

13. $3 + 7 + 2 = ?$

14. Which shape has two equal halves? Draw it.



15. A nickel is the same as how many pennies?

Lesson #5

1. Draw a line to match each collective noun with its clue.

flock

group of lions

pride

group of birds

herd

group of elephants

2. Write the correct pronoun.

myself

himself

itself

Josh began to see _____ as the best goalie.

3. Write an adjective from the word box in each sentence.

wooden

happy

eight

tall

The _____ baby smiled and giggled.

The sisters put the _____ boat in the water.

Four _____ basketball players got on the bus.

NTI Day 5 Art Mr. Jones

Using pencil or colored pencil or crayon, sketch a picture of your favorite winter snow scene. Turn into Mr. Jones with your NTI packet.