

NTI DAY 8

**READ YOUR READING
BOOK And SIGN!**

Parent Signature

Name: _____



Daily ELA Practice

A

011

ELA BUZZ



Complete the sentence to match the picture.

Jenna sat _____ her brother on the roller coaster.

- a. next to b. below


Write the letters on the correct side of the chart.

a e p u
t i n b

Vowels

Consonants

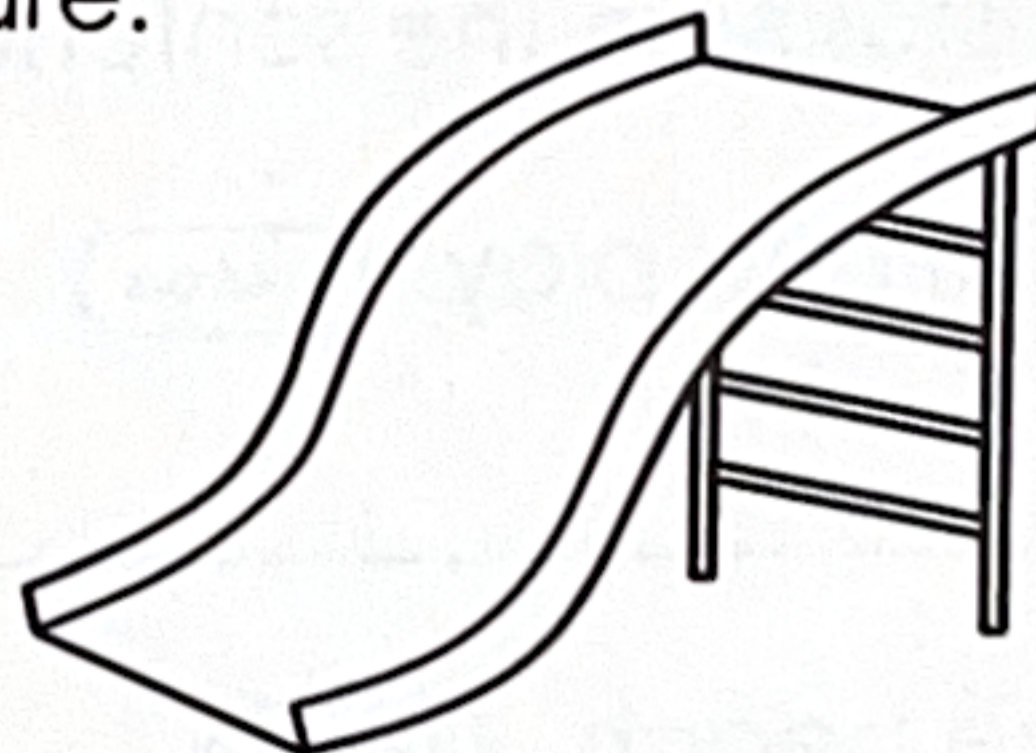
Add a period or question mark to complete the sentences.



Do you want to go to the park _____

We can go on the swings _____

Complete the word to match the picture.



_____ ide

Name: _____



ELA BUZZ



Sara

Circle the correct question words to complete the sentences.

1. How / Where old are you?
2. When / What is your name?
3. Who / Why are you smiling?

Underline the **one** vowel in the word.

fun

Underline the **two** vowels in the word.

heat

Draw a line to match the words that are opposites.

bad •

• sad

happy •

• dark

light •

• good

Find the mistakes in the sentences. Then rewrite them correctly.

i like to Swim and play. (2 errors)

Do u like the beach. (2 errors)



Name: _____



Math Buzz

Kimi has 11 pieces of candy.
Bree has 4 fewer pieces.
How many pieces of candy does Bree have?

11	
4	?

answer: _____ pieces of candy

Write how many tens and ones make this number.

29	
tens	ones

Add.

$$9 + 4 + 5 = \underline{\quad}$$

Today is _____
(Day of the Week)

Color today's date.

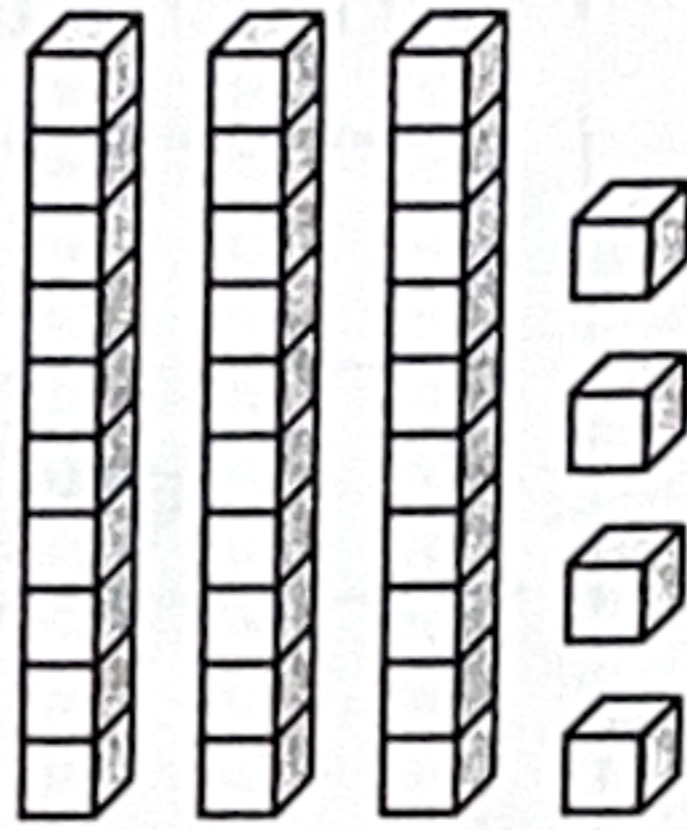
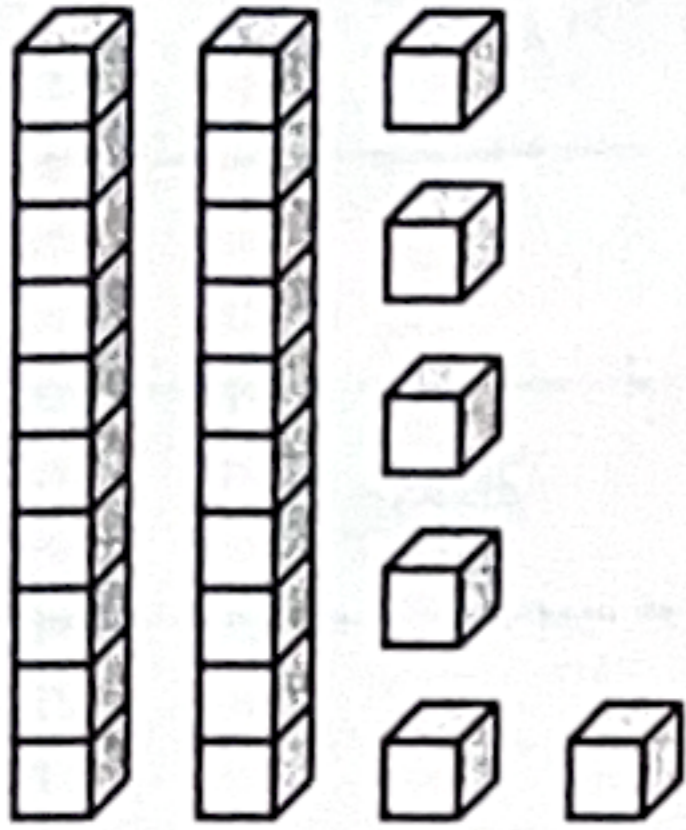
1	2	3	4	5	6	7
8	9	10	11	12	13	14
15	16	17	18	19	20	21
22	23	24	25	26	27	28
29	30	31				

Name: _____



Math Buzz

Compare.



_____ is less than _____

_____ < _____

What time is shown on the clock?






Solve.

$$\begin{array}{r} 11 \\ + 7 \\ \hline \end{array}$$

$$\begin{array}{r} 18 \\ - 11 \\ \hline \end{array}$$

Fill in the tallies to complete the chart.

Ty's Coins		Total
Penny 		5
Nickel 		2
Dime 		3

How many more dimes than nickels does Ty have? _____

Name: _____

Week of: _____

PE Activity Journal

ACTIVITY

DURATION

ACTIVITY

DURATION

ACTIVITY

DURATION

ACTIVITY

DURATION

ACTIVITY

DURATION