

DAY

3

Name _____

March Madness

March Madness is a term used to describe the excitement and frenzy surrounding the NCAA Men's Basketball Tournament. The tournament takes place annually in March and April. It has 68 college basketball teams from across the United States.

During March Madness, people across the country fill out brackets to predict which team will win each game. Fans also gather to watch games on television or attend in person. The tournament ended with the Final Four, the last four teams remaining in the tournament.

March Madness is a big event in the world of sports. But it has also had a huge economic impact. The cities that host the games have seen increases in tourism and spending, and the NCAA earns billions of dollars in broadcast rights and sponsorships.



1. What is March Madness and when does it happen?

2. What do people do during March Madness?

3. What is the economic impact of March Madness?

Name: _____

Date: _____ # _____

Add:

1. $15 + 32 + 23 =$ _____

2. $59 + 38 =$ _____

Subtract:

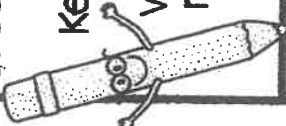
3. $90 - 30 =$ _____

4. $58 - 39 =$ _____

5. Josh has 54 pencils.

Ken has 63 pencils.

Who has an even number of pencils?



6. Write this number in expanded form.

617

7. Divide the rectangle into 8 squares.

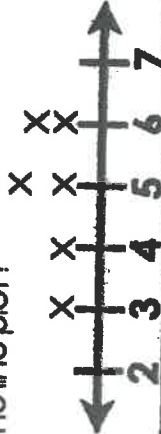


8. There are ninety bikers that leave the school each day. Forty-three go right and the rest go left. How many bikers turn left?


9. Jim measured pencils and made this table.

Pencil	Length (inches)
1	5 inches
2	3 inches
3	5 inches
4	4 inches
5	4 inches
6	6 inches
7	6 inches

Which number does he need to put an X over to complete the line plot?



10. This is an inch ruler. How long is the crayon?



#	answer
1	
2	
3	
4	
5	
6	
7	
8	
9	
10	