

**NTI**  
**DAY SIX**

2nd Grade: Mrs. Sexton & Ms. Mayberry

## Lesson #6

### Trust Part 2

*If I tell her that I saw the test, she might not let me take it. Then I'll get a bad grade, thought Terra. If I don't tell her I saw the answers, I'll know I wasn't truthful. It'll be as if I cheated. I always get As on my science tests anyway, she told herself. Maybe I don't need to say anything at all.*

Ms. Jenkins came back into the room. Terra felt very nervous. She just couldn't stand the uneasy feeling. She took a deep breath and walked up to her teacher's desk.

"Ms. Jenkins," whispered Terra. "I have to tell you something. When I took the papers, I accidentally got a copy of today's science test. I saw the answers," she said sadly. "I didn't mean to, but I did. I guess I was a little scared, so I just put the test back on your desk. I hid it under some other papers."

"Thank you for letting me know, Terra. You're always very truthful. You're brave, too. You could have decided not to tell me about this. But you did the right thing," Ms. Jenkins said. She looked right into Terra's eyes.

"I'm proud of you," she said. "I can give you a different science test. It won't matter that you saw the answers."

Terra took another deep breath. She smiled at Miss Jenkins and went back to her desk to read her library book.



- RL.2.1 1. What is Terra's problem at the beginning of this passage?
- A) She got a bad grade on her test.
  - B) She can't remember the words on the science test.
  - C) She can't decide whether she should be truthful.
- RL.2.3 2. Which words describe Terra when she talks with Ms. Jenkins?
- brave      nervous      uneasy      cheerful      truthful
- CCRA.R.1 3. Why is the title of the story "Trust"?
- A) Terra learns an important lesson about trust.
  - B) Terra feels uneasy about trusting others.
  - C) Trust is the name of Terra's school.
- L.2.4 4. Which word means the same as the underlined word?
- She just couldn't stand the uneasy feeling.
- hard      slow      troubled      calm
- RL.2.3 5. How is Terra feeling at the end of the story?
- 
- 
- 


- CCRA.R.1 6. Draw a line under some words in the text that support your answer to item 5.

## Lesson #6

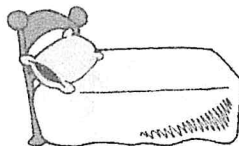

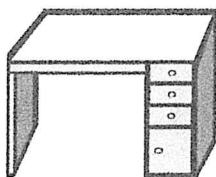
1 – 2. Write each short a word on the lines below.

Ann can dance. Dan has a cap.


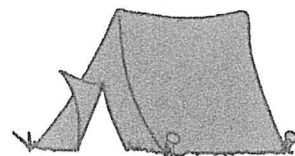
Handwriting practice lines consisting of solid top and bottom lines with a dashed middle line. There are four sets of these lines, each set corresponding to one of the words in the sentence above: 'Ann', 'can', 'dance', and 'Dan'. Each set has a solid line above, a dashed line in the middle, and a solid line below.



3. Draw a line to each picture that rhymes with **bed**.



bed



4. Color over each word that begins with the sound of f.  
Write a capital and lower case Ff on the line below 3 times.


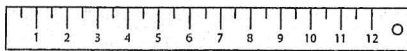


\_\_\_\_\_

-----

\_\_\_\_\_

5. Say the name of each picture. Print the letter for its middle sound on the line. Trace the whole word.



\_\_\_\_\_

ru er

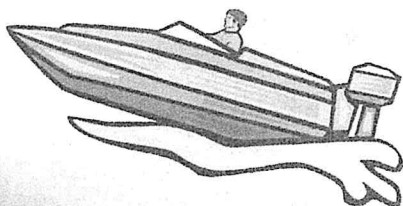
\_\_\_\_\_

le on

\_\_\_\_\_

ti er

6. Draw a line from the T to every picture that ends with the t sound.



T



## Lesson #6

1. Choose the meaning of the word *last* in each sentence.

This is the last time I'm calling you to come in for dinner!

final                  start                  loudest

The medicine should last all night.

first                  finish                  continue



2. Circle two adjectives that describe the underlined noun.

The gentle tall giraffe is a peaceful animal.

3. Write a compound sentence. Place a comma before the conjunction. Use words from the word bank.

Rusty	and	strawberry	his
ice cream	loves	is	favorite

---



---

4. Add a comma.

4. Circle the words that need capital letters.

cereal      chevrolet      fourth of july

5. Read the sentences. Underline the contractions that are made from these words.

I will      must not      we had

We'd gone to school without our homework.

We mustn't go without our sweaters, so I'll go get them.

6. What does the underlined word mean?

I was unaware that you were sick.

thinking      afraid      not aware

7. What does each compound word mean?

timekeeper → a person who  
keeps track of \_\_\_\_\_

underarm → the part under  
a person's \_\_\_\_\_

8. Underline the predicate in the sentence.  
Circle the verb in the predicate.

The squirrel ran up the tree.



## Sample Lesson #1

### What Animals Need

All animals need **food, water,** and **air** to stay alive. The bigger the animal, the more food and water it needs. Animals also need shelter. **Shelter** is a safe place for animals to live. Some animals find shelter in a tree or in a hole in the ground. Other animals use caves to keep them safe.



1. Animals need **four** things to stay alive. They need food, water, and air. What else do they need?

---

2. Name a kind of shelter for an animal.

---

3. Spring and summer are seasons. List the other **two** seasons.

---

---





4 – 5. Match each word with its definition.

- |             |   |
|-------------|---|
| ___ flood   | A) no rain for long periods                     |
| ___ wind    | B) what the outside air is like                 |
| ___ drought | C) moving air                                   |
| ___ weather | D) when rivers and lakes overflow onto the land |

6. What do you call a tool that is used to magnify, or make something look larger?

weather vane    hand lens    thermometer

7. Write **T** if the statement is true or **F** if it is false.

\_\_\_\_\_ A shelter is a safe place for an animal to live.

\_\_\_\_\_ Rain and snow are types of seasons.

8. What does this tool measure?

- A) wind direction
- B) temperature
- C) rainfall

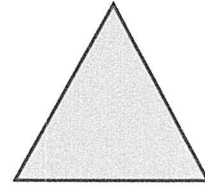


## Lesson #6

1. Which number comes between 19 and 34?

16    37    10    25

2. This triangle has \_\_\_\_\_ sides and \_\_\_\_\_ angles.



3. Which number is greater, 61 or 36?

4. Polly's number is five more than seven. Find Polly's number.

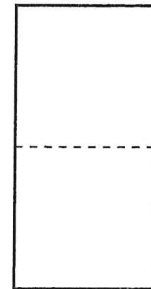
$7 + 5 = \bigcirc \leftarrow$  Polly's number

5.  $14 - 6 = ?$

6. Which numbers are missing?

20, 30, \_\_\_\_\_, 50, 60, \_\_\_\_\_

7. This rectangle is divided into two equal shares, called *halves*. Draw the rectangle in your answer box. Divide it into halves.



8.  $4 + 3 = ?$

9. What number does the symbol stand for?  $\times - 8 = 2$

10. The value of a nickel is 5¢.  
Count by fives. How much is this?



11. Write the number that shows  $20 + 8$ .

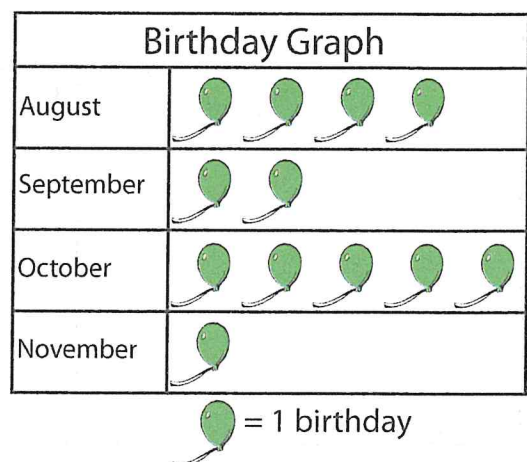
12.  $5 + 6 + 3 = ?$

13.  $9 - 2 = ?$

Use the graph to answer the next two items.

14. How many children have birthdays in August and September?

15. How many more students have birthdays in October than in November?



# NTI Day 6

## Physical Education (PE) Bingo

B I N G O

5 squat jumps	10 side to side jumps	5 plank jacks	5 burpees	10 high kicks
5 calf raises	5 side lunges	10 forward jumps	10 second imaginary rope	5 sumo squats
5 lunges	10 scissor kicks	Free!	10 mountain climbers	5 push ups
10 star crunches	30 jog on the spot	10 crunches	10 torso twists	10 hammer fists
10 arm raises	5 knee ups	5 arm circles	10 toe touches	5 Russian twists