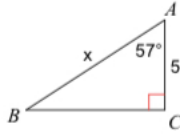


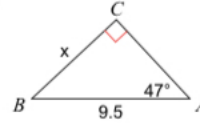
## Sine, Cosine, and Tangent Practice

Find the measure of each side indicated. Round to the nearest tenth.

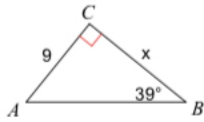
1)



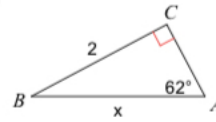
2)



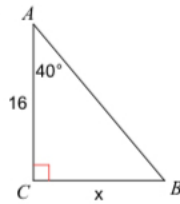
3)



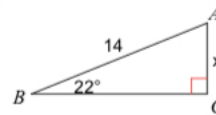
4)



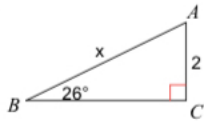
5)



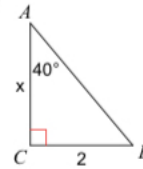
6)



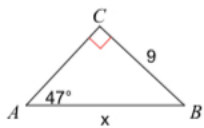
7)



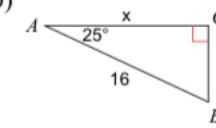
8)



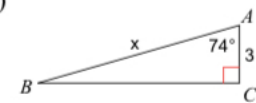
9)



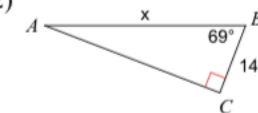
10)



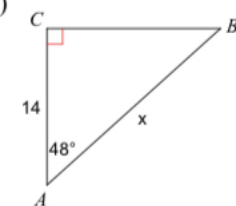
11)



12)



13)



14)

