



Listen to your teacher  
read the directions.



Friday


Saturday

Sunday

Monday





$$6\text{¢} - 3\text{¢} =$$



\_\_\_\_\_ tens \_\_\_\_\_

\_\_\_\_\_

\_\_\_\_\_



**Directions**

- If yesterday was Thursday, circle the day that is today.
- Circle the container that holds the most.
- Write how many cents are left.
- Write how many tens. Then write the number.

**Problem Solving**

- Allen wants to measure three pencils. Use your cubes to help him measure. Graph the length of the pencils. Color 1  in the graph for each cube.