




Spring

Subtraction Fun


Solve. Use the pictures for help.




$$8 - 3 = \underline{\quad}$$




$$5 - 4 = \underline{\quad}$$




$$6 - 4 = \underline{\quad}$$




$$10 - 2 = \underline{\quad}$$




$$5 - 3 = \underline{\quad}$$



$$7 - 5 = \underline{\quad}$$



$$9 - 2 = \underline{\quad}$$



$$4 - 3 = \underline{\quad}$$