

DO EVERY OTHER PROBLEM!

Name _____

Date _____

1. Solve the addition problems below using the standard algorithm.

a.
$$\begin{array}{r} 6,311 \\ + 268 \\ \hline \end{array}$$

b.
$$\begin{array}{r} 6,311 \\ + 1,268 \\ \hline \end{array}$$

c.
$$\begin{array}{r} 6,314 \\ + 1,268 \\ \hline \end{array}$$

d.
$$\begin{array}{r} 6,314 \\ + 2,493 \\ \hline \end{array}$$

e.
$$\begin{array}{r} 8,314 \\ + 2,493 \\ \hline \end{array}$$

f.
$$\begin{array}{r} 12,378 \\ + 5,463 \\ \hline \end{array}$$

g.
$$\begin{array}{r} 52,098 \\ + 6,048 \\ \hline \end{array}$$

h.
$$\begin{array}{r} 34,698 \\ + 71,840 \\ \hline \end{array}$$

i.
$$\begin{array}{r} 544,811 \\ + 356,445 \\ \hline \end{array}$$

j. $527 + 275 + 752 =$

k. $38,193 + 6,376 + 241,457 =$

DO EVERY OTHER PROBLEM!

Name _____

Date _____

1. Directions: Use the standard subtraction algorithm to solve the problems below.

a.
$$\begin{array}{r} 9,656 \\ -838 \\ \hline \end{array}$$

b.
$$\begin{array}{r} 59,656 \\ -5,880 \\ \hline \end{array}$$

c.
$$\begin{array}{r} 759,656 \\ -579,989 \\ \hline \end{array}$$

d.
$$\begin{array}{r} 294,150 \\ -166,370 \\ \hline \end{array}$$

e.
$$\begin{array}{r} 294,150 \\ -239,089 \\ \hline \end{array}$$

f.
$$\begin{array}{r} 294,150 \\ -96,400 \\ \hline \end{array}$$

g.
$$\begin{array}{r} 800,500 \\ -79,989 \\ \hline \end{array}$$

h.
$$\begin{array}{r} 800,500 \\ -45,500 \\ \hline \end{array}$$

i.
$$\begin{array}{r} 800,500 \\ -276,664 \\ \hline \end{array}$$

DO EVERY OTHER PROBLEM!

Name : _____ Score : _____

Teacher : _____ Date : _____

$$\begin{array}{r} 43 \\ \times 26 \\ \hline \end{array}$$

$$\begin{array}{r} 93 \\ \times 86 \\ \hline \end{array}$$

$$\begin{array}{r} 58 \\ \times 51 \\ \hline \end{array}$$

$$\begin{array}{r} 25 \\ \times 96 \\ \hline \end{array}$$

$$\begin{array}{r} 53 \\ \times 77 \\ \hline \end{array}$$

$$\begin{array}{r} 81 \\ \times 35 \\ \hline \end{array}$$

$$\begin{array}{r} 26 \\ \times 59 \\ \hline \end{array}$$

$$\begin{array}{r} 39 \\ \times 66 \\ \hline \end{array}$$

$$\begin{array}{r} 32 \\ \times 74 \\ \hline \end{array}$$

$$\begin{array}{r} 40 \\ \times 71 \\ \hline \end{array}$$

$$\begin{array}{r} 40 \\ \times 66 \\ \hline \end{array}$$

$$\begin{array}{r} 24 \\ \times 68 \\ \hline \end{array}$$

$$\begin{array}{r} 92 \\ \times 52 \\ \hline \end{array}$$

$$\begin{array}{r} 45 \\ \times 58 \\ \hline \end{array}$$

$$\begin{array}{r} 79 \\ \times 54 \\ \hline \end{array}$$

$$\begin{array}{r} 60 \\ \times 11 \\ \hline \end{array}$$



DO EVERY OTHER PROBLEM!

3-Digit by 1-Digit Multiplication (A)

Multiply to determine each product.

$\begin{array}{r} 742 \\ \times 2 \\ \hline \end{array}$	$\begin{array}{r} 143 \\ \times 4 \\ \hline \end{array}$	$\begin{array}{r} 148 \\ \times 5 \\ \hline \end{array}$	$\begin{array}{r} 260 \\ \times 2 \\ \hline \end{array}$	$\begin{array}{r} 726 \\ \times 6 \\ \hline \end{array}$	$\begin{array}{r} 450 \\ \times 4 \\ \hline \end{array}$	$\begin{array}{r} 527 \\ \times 3 \\ \hline \end{array}$	$\begin{array}{r} 874 \\ \times 4 \\ \hline \end{array}$
--	--	--	--	--	--	--	--

$\begin{array}{r} 992 \\ \times 3 \\ \hline \end{array}$	$\begin{array}{r} 672 \\ \times 8 \\ \hline \end{array}$	$\begin{array}{r} 379 \\ \times 4 \\ \hline \end{array}$	$\begin{array}{r} 108 \\ \times 6 \\ \hline \end{array}$	$\begin{array}{r} 614 \\ \times 6 \\ \hline \end{array}$	$\begin{array}{r} 594 \\ \times 8 \\ \hline \end{array}$	$\begin{array}{r} 348 \\ \times 9 \\ \hline \end{array}$	$\begin{array}{r} 979 \\ \times 8 \\ \hline \end{array}$
--	--	--	--	--	--	--	--

$\begin{array}{r} 710 \\ \times 7 \\ \hline \end{array}$	$\begin{array}{r} 719 \\ \times 9 \\ \hline \end{array}$	$\begin{array}{r} 489 \\ \times 6 \\ \hline \end{array}$	$\begin{array}{r} 679 \\ \times 6 \\ \hline \end{array}$	$\begin{array}{r} 246 \\ \times 6 \\ \hline \end{array}$	$\begin{array}{r} 567 \\ \times 9 \\ \hline \end{array}$	$\begin{array}{r} 368 \\ \times 8 \\ \hline \end{array}$	$\begin{array}{r} 876 \\ \times 5 \\ \hline \end{array}$
--	--	--	--	--	--	--	--

$\begin{array}{r} 585 \\ \times 9 \\ \hline \end{array}$	$\begin{array}{r} 716 \\ \times 4 \\ \hline \end{array}$	$\begin{array}{r} 312 \\ \times 6 \\ \hline \end{array}$	$\begin{array}{r} 823 \\ \times 5 \\ \hline \end{array}$	$\begin{array}{r} 651 \\ \times 2 \\ \hline \end{array}$	$\begin{array}{r} 551 \\ \times 9 \\ \hline \end{array}$	$\begin{array}{r} 920 \\ \times 9 \\ \hline \end{array}$	$\begin{array}{r} 286 \\ \times 9 \\ \hline \end{array}$
--	--	--	--	--	--	--	--

$\begin{array}{r} 605 \\ \times 7 \\ \hline \end{array}$	$\begin{array}{r} 781 \\ \times 4 \\ \hline \end{array}$	$\begin{array}{r} 411 \\ \times 8 \\ \hline \end{array}$	$\begin{array}{r} 147 \\ \times 4 \\ \hline \end{array}$	$\begin{array}{r} 852 \\ \times 7 \\ \hline \end{array}$	$\begin{array}{r} 762 \\ \times 5 \\ \hline \end{array}$	$\begin{array}{r} 549 \\ \times 9 \\ \hline \end{array}$	$\begin{array}{r} 212 \\ \times 3 \\ \hline \end{array}$
--	--	--	--	--	--	--	--

$\begin{array}{r} 844 \\ \times 8 \\ \hline \end{array}$	$\begin{array}{r} 626 \\ \times 7 \\ \hline \end{array}$	$\begin{array}{r} 327 \\ \times 7 \\ \hline \end{array}$	$\begin{array}{r} 237 \\ \times 8 \\ \hline \end{array}$	$\begin{array}{r} 695 \\ \times 3 \\ \hline \end{array}$	$\begin{array}{r} 509 \\ \times 6 \\ \hline \end{array}$	$\begin{array}{r} 101 \\ \times 3 \\ \hline \end{array}$	$\begin{array}{r} 257 \\ \times 3 \\ \hline \end{array}$
--	--	--	--	--	--	--	--

DO EVERY OTHER PROBLEM!

Name : _____

Score : _____

Teacher : _____

Date : _____

$60 \div 5 =$

$80 \div 8 =$

$20 \div 4 =$

$24 \div 6 =$

$84 \div 7 =$

$24 \div 4 =$

$90 \div 9 =$

$72 \div 9 =$

$36 \div 4 =$

$8 \div 2 =$

$6 \div 3 =$

$12 \div 6 =$

$10 \div 5 =$

$54 \div 6 =$

$40 \div 8 =$

$49 \div 7 =$

$12 \div 1 =$

$49 \div 7 =$

$16 \div 2 =$

$14 \div 2 =$

$18 \div 3 =$

$72 \div 8 =$

$72 \div 9 =$

$3 \div 1 =$

$11 \div 1 =$

$5 \div 5 =$

$4 \div 1 =$

$22 \div 2 =$

$20 \div 4 =$

$8 \div 8 =$



DO EVERY OTHER PROBLEM!

Name: _____

Date: _____

Division worksheets

$2 \overline{)980}$

$7 \overline{)252}$

$7 \overline{)329}$

$4 \overline{)736}$

$5 \overline{)410}$

$4 \overline{)176}$

$3 \overline{)360}$

$4 \overline{)456}$

$2 \overline{)784}$

$7 \overline{)189}$

$9 \overline{)225}$

$7 \overline{)693}$

$2 \overline{)894}$

$4 \overline{)768}$

$6 \overline{)168}$

$9 \overline{)18}$

$4 \overline{)932}$

$2 \overline{)460}$

$2 \overline{)774}$

$7 \overline{)938}$

$2 \overline{)128}$

$3 \overline{)285}$

$9 \overline{)549}$

$9 \overline{)909}$

$1 \overline{)294}$

$2 \overline{)112}$

$6 \overline{)498}$

$6 \overline{)150}$

$7 \overline{)147}$

$6 \overline{)318}$

$7 \overline{)182}$

$6 \overline{)528}$

$9 \overline{)972}$

$7 \overline{)546}$

$8 \overline{)672}$

DO EVERY OTHER PROBLEM!

Name : _____

Score : _____

Teacher : _____

Date : _____

Write the Correct Comparison Symbol (>, < or =) in Each Box

1) $\frac{2}{3}$ $\frac{1}{12}$

11) $\frac{3}{10}$ $\frac{3}{8}$

2) $\frac{7}{11}$ $\frac{4}{9}$

12) $\frac{3}{5}$ $\frac{2}{11}$

3) $\frac{2}{4}$ $\frac{2}{8}$

13) $\frac{2}{3}$ $\frac{4}{9}$

4) $\frac{8}{12}$ $\frac{6}{11}$

14) $\frac{6}{9}$ $\frac{4}{5}$

5) $\frac{2}{6}$ $\frac{8}{12}$

15) $\frac{1}{2}$ $\frac{2}{4}$

6) $\frac{7}{8}$ $\frac{1}{6}$

16) $\frac{6}{9}$ $\frac{1}{2}$

7) $\frac{2}{4}$ $\frac{6}{10}$

17) $\frac{1}{12}$ $\frac{5}{7}$

8) $\frac{3}{5}$ $\frac{2}{7}$

18) $\frac{5}{11}$ $\frac{3}{4}$

9) $\frac{2}{7}$ $\frac{3}{10}$

19) $\frac{6}{7}$ $\frac{1}{3}$

10) $\frac{4}{8}$ $\frac{3}{6}$

20) $\frac{1}{2}$ $\frac{3}{5}$



DO EVERY OTHER PROBLEM!
Ordering Fractions Worksheet

Order the fractions from smallest to greatest.

1 a. $\frac{5}{10}$, $\frac{5}{7}$, $\frac{5}{8}$	1 b. $\frac{10}{11}$, $\frac{10}{12}$, $\frac{10}{3}$
2 a. $\frac{2}{8}$, $\frac{1}{2}$, $\frac{8}{8}$	2 b. $\frac{1}{7}$, $\frac{1}{11}$, $\frac{1}{3}$
3 a. $\frac{9}{1}$, $\frac{9}{3}$, $\frac{9}{2}$	3 b. $\frac{2}{8}$, $\frac{7}{5}$, $\frac{1}{2}$
4 a. $\frac{12}{4}$, $\frac{9}{12}$, $\frac{1}{2}$	4 b. $\frac{6}{8}$, $\frac{6}{6}$, $\frac{6}{5}$
5 a. $\frac{10}{9}$, $\frac{3}{9}$, $\frac{1}{1}$	5 b. $\frac{11}{11}$, $\frac{3}{9}$, $\frac{7}{10}$

DO EVERY OTHER PROBLEM!

Adding Proper Fractions

1) $\frac{6}{14} + \frac{10}{14} =$

2) $\frac{2}{8} + \frac{5}{8} =$

3) $\frac{4}{7} + \frac{5}{7} =$

4) $\frac{9}{10} + \frac{8}{10} =$

5) $\frac{15}{19} + \frac{11}{19} =$

6) $\frac{6}{15} + \frac{4}{15} =$

7) $\frac{1}{4} + \frac{1}{4} =$

8) $\frac{7}{9} + \frac{6}{9} =$

9) $\frac{9}{20} + \frac{2}{20} =$

10) $\frac{5}{6} + \frac{3}{6} =$

11) $\frac{1}{3} + \frac{1}{3} =$

12) $\frac{8}{13} + \frac{10}{13} =$

13) $\frac{12}{16} + \frac{8}{16} =$

14) $\frac{4}{5} + \frac{3}{5} =$

DO EVERY OTHER PROBLEM!

Adding Proper Fractions

1) $\frac{5}{6} + \frac{2}{7} + \frac{1}{2} =$

2) $\frac{11}{16} + \frac{10}{12} + \frac{6}{8} =$

3) $\frac{2}{3} + \frac{13}{15} + \frac{11}{12} =$

4) $\frac{9}{10} + \frac{7}{8} + \frac{3}{4} =$

5) $\frac{1}{2} + \frac{3}{4} + \frac{5}{6} =$

6) $\frac{2}{3} + \frac{8}{9} + \frac{4}{5} =$

7) $\frac{9}{14} + \frac{4}{7} + \frac{11}{28} =$

8) $\frac{3}{5} + \frac{2}{3} + \frac{5}{6} =$

9) $\frac{16}{20} + \frac{8}{10} + \frac{4}{5} =$

10) $\frac{8}{12} + \frac{1}{4} + \frac{13}{24} =$

11) $\frac{2}{3} + \frac{1}{2} + \frac{5}{7} =$

12) $\frac{14}{36} + \frac{5}{18} + \frac{7}{9} =$

13) $\frac{12}{16} + \frac{6}{8} + \frac{3}{4} =$

14) $\frac{4}{6} + \frac{1}{2} + \frac{6}{8} =$

DO EVERY OTHER PROBLEM!

Student Name: _____

Score: _____

Subtracting Like Fractions

$$\frac{13}{19} - \frac{8}{19} = \boxed{}$$

$$\frac{14}{23} - \frac{5}{23} = \boxed{}$$

$$\frac{9}{25} - \frac{2}{25} = \boxed{}$$

$$\frac{7}{13} - \frac{4}{13} = \boxed{}$$

$$\frac{14}{15} - \frac{2}{15} = \boxed{}$$

$$\frac{11}{24} - \frac{5}{24} = \boxed{}$$

$$\frac{13}{22} - \frac{1}{22} = \boxed{}$$

$$\frac{10}{11} - \frac{7}{11} = \boxed{}$$

$$\frac{15}{17} - \frac{5}{17} = \boxed{}$$

$$\frac{11}{21} - \frac{4}{21} = \boxed{}$$

DO EVERY OTHER PROBLEM!

Name : _____

Score : _____

Teacher : _____

Date : _____

Subtracting Fractions

1) $\frac{4}{5} - \frac{1}{2} =$

2) $\frac{2}{5} - \frac{1}{3} =$

3) $\frac{6}{10} - \frac{2}{4} =$

4) $\frac{4}{10} - \frac{1}{4} =$

5) $\frac{2}{3} - \frac{2}{5} =$

6) $\frac{4}{5} - \frac{1}{3} =$

7) $\frac{3}{4} - \frac{1}{5} =$

8) $\frac{3}{4} - \frac{3}{10} =$

9) $\frac{9}{10} - \frac{4}{5} =$

10) $\frac{2}{4} - \frac{1}{2} =$



DO EVERY OTHER PROBLEM!

Name : _____

Score : _____

Teacher : _____

Date : _____

Subtracting Fractions

1) $\frac{1}{2} - \frac{1}{10} =$

2) $\frac{2}{3} - \frac{1}{2} =$

3) $\frac{2}{4} - \frac{1}{3} =$

4) $\frac{2}{3} - \frac{2}{5} =$

5) $\frac{2}{4} - \frac{2}{10} =$

6) $\frac{2}{5} - \frac{1}{3} =$

7) $\frac{1}{2} - \frac{2}{10} =$

8) $\frac{2}{4} - \frac{1}{3} =$

9) $\frac{4}{5} - \frac{2}{3} =$

10) $\frac{6}{10} - \frac{1}{2} =$

Do EVERY OTHER PROBLEM!

Student Name: _____

Score: _____

Multiplying Fractions Worksheet

Please simplify all products.

$$\frac{4}{5} \times \frac{5}{6} =$$

$$\frac{8}{9} \times \frac{3}{4} =$$

$$\frac{1}{4} \times \frac{4}{5} =$$

$$\frac{3}{8} \times \frac{5}{6} =$$

$$\frac{7}{9} \times \frac{3}{7} =$$

$$\frac{2}{3} \times \frac{1}{8} =$$

$$\frac{9}{10} \times \frac{2}{3} =$$

$$\frac{1}{4} \times \frac{2}{9} =$$

$$\frac{3}{7} \times \frac{7}{8} =$$

$$\frac{5}{6} \times \frac{1}{10} =$$

$$\frac{3}{4} \times \frac{5}{6} =$$

$$\frac{6}{7} \times \frac{1}{6} =$$

$$\frac{2}{5} \times \frac{3}{4} =$$

$$\frac{5}{6} \times \frac{4}{5} =$$

$$\frac{1}{3} \times \frac{3}{5} =$$

DO EVERY OTHER PROBLEM!

Name : _____

Score : _____

Teacher : _____

Date : _____

Write the Place and Value of Each Number.

1) 14,6[^]65.46 What place is the selected digit in? _____
What is the value of the selected digit? _____

2) 15,16[^]4.77 What place is the selected digit in? _____
What is the value of the selected digit? _____

3) 99,246.8[^]1 What place is the selected digit in? _____
What is the value of the selected digit? _____

4) 58,33[^]6.96 What place is the selected digit in? _____
What is the value of the selected digit? _____

5) 59,11[^]6.22 What place is the selected digit in? _____
What is the value of the selected digit? _____

6) 77,654.4[^]3 What place is the selected digit in? _____
What is the value of the selected digit? _____

7) 7[^]4,278.87 What place is the selected digit in? _____
What is the value of the selected digit? _____

8) 31,362.9[^]4 What place is the selected digit in? _____
What is the value of the selected digit? _____

9) 52,79[^]9.81 What place is the selected digit in? _____
What is the value of the selected digit? _____

0) 21,937.6[^]9 What place is the selected digit in? _____
What is the value of the selected digit? _____



DO EVERY OTHER PROBLEM!

LAUNCHING A NEW YEAR

Determine which choice best answers each question.

- 1) Which is the place value of the 7 in the number 634,278?
A. hundreds
B. thousands
C. ones
D. tens
- 2) Which is the place value of the 1 in the number 184,735?
A. ten thousands
B. tens
C. thousands
D. hundred thousands
- 3) Which is the place value of the 4 in the number 497,162?
A. hundred thousands
B. ten thousands
C. thousands
D. hundreds
- 4) Which is the place value of the 4 in the number 4,269?
A. thousands
B. tens
C. hundreds
D. ones
- 5) Which is the place value of the 4 in the number 61,482?
A. ones
B. hundreds
C. tens
D. ten thousands
- 6) Which is the place value of the 9 in the number 9,231,478?
A. hundred thousands
B. tens
C. millions
D. ones
- 7) Which is the place value of the 6 in the number 35,968?
A. hundreds
B. thousands
C. ones
D. tens
- 8) Which is the place value of the 9 in the number 4,971,683?
A. hundred thousands
B. hundreds
C. tens
D. ones
- 9) Which is the place value of the 8 in the number 68,975?
A. tens
B. thousands
C. hundreds
D. ten thousands
- 10) Which is the place value of the 4 in the number 427,835?
A. ones
B. tens
C. thousands
D. hundred thousands
- 11) Which is the place value of the 9 in the number 179,543?
A. tens
B. hundreds
C. thousands
D. hundred thousands
- 12) Which is the place value of the 3 in the number 6,235?
A. thousands
B. ones
C. hundreds
D. tens

Answers

1. _____
2. _____
3. _____
4. _____
5. _____
6. _____
7. _____
8. _____
9. _____
10. _____
11. _____
12. _____

DO EVERY OTHER PROBLEM!

DO WHATEVER YOU WANT TO DO AT LEAST 17 PROBLEMS

Solve each problem.

- | | | |
|---|---|---|
| <p>1) Which number has the least value?
 A. 8.27
 B. 72.8
 C. 82.7
 D. 78.2</p> | <p>2) Which number has the least value?
 A. 7.61
 B. 6.17
 C. 67.1
 D. 6.71</p> | <p>3) Which number has the least value?
 A. 31.0
 B. 0.13
 C. 1.03
 D. 10.3</p> |
| <p>4) Which number has the least value?
 A. 15.2
 B. 12.5
 C. 5.12
 D. 21.5</p> | <p>5) Which number has the least value?
 A. 18.0
 B. 10.8
 C. 8.10
 D. 0.81</p> | <p>6) Which number has the least value?
 A. 45.3
 B. 43.5
 C. 35.4
 D. 3.45</p> |
| <p>7) Which number has the least value?
 A. 8.47
 B. 48.7
 C. 78.4
 D. 87.4</p> | <p>8) Which number has the least value?
 A. 59.1
 B. 19.5
 C. 95.1
 D. 9.15</p> | <p>9) Which number has the least value?
 A. 98.3
 B. 3.98
 C. 39.8
 D. 89.3</p> |
| <p>10) Which number has the greatest value?
 A. 80.5
 B. 85.0
 C. 5.08
 D. 58.0</p> | <p>11) Which number has the greatest value?
 A. 8.96
 B. 86.9
 C. 6.89
 D. 8.69</p> | <p>12) Which number has the greatest value?
 A. 9.42
 B. 2.49
 C. 2.94
 D. 4.92</p> |
| <p>13) Which number has the greatest value?
 A. 04.1
 B. 41.0
 C. 0.41
 D. 4.10</p> | <p>14) Which number has the greatest value?
 A. 8.95
 B. 5.89
 C. 9.85
 D. 89.5</p> | <p>15) Which number has the greatest value?
 A. 7.28
 B. 82.7
 C. 27.8
 D. 2.87</p> |
| <p>16) Which number has the greatest value?
 A. 0.28
 B. 08.2
 C. 02.8
 D. 2.80</p> | <p>17) Which number has the greatest value?
 A. 30.6
 B. 06.3
 C. 0.63
 D. 63.0</p> | <p>18) Which number has the greatest value?
 A. 2.54
 B. 54.2
 C. 42.5
 D. 4.52</p> |

Answers

1. _____
2. _____
3. _____
4. _____
5. _____
6. _____
7. _____
8. _____
9. _____
10. _____
11. _____
12. _____
13. _____
14. _____
15. _____
16. _____
17. _____
18. _____

DO EVERY OTHER PROBLEM!

Fractions/Decimals Worksheet

Write the following decimals as fractions.

1 a. $0.64 =$

1 b. $0.98 =$

1 c. $0.33 =$

2 a. $0.13 =$

2 b. $0.9 =$

2 c. $0.8 =$

3 a. $0.24 =$

3 b. $0.92 =$

3 c. $0.42 =$

4 a. $0.23 =$

4 b. $0.51 =$

4 c. $0.57 =$

5 a. $0.71 =$

5 b. $0.84 =$

5 c. $0.69 =$

6 a. $0.21 =$

6 b. $0.73 =$

6 c. $0.45 =$

7 a. $0.55 =$

7 b. $0.61 =$

7 c. $0.14 =$

8 a. $0.18 =$

8 b. $0.4 =$

8 c. $0.26 =$

DO EVERY OTHER PROBLEM!

Fractions/Decimals Worksheet

Write the following fractions as decimals.

1 a. $\frac{8}{100} =$

1 b. $\frac{1}{10} =$

1 c. $\frac{16}{100} =$

2 a. $\frac{3}{10} =$

2 b. $\frac{4}{10} =$

2 c. $\frac{9}{10} =$

3 a. $\frac{75}{100} =$

3 b. $\frac{81}{100} =$

3 c. $\frac{5}{10} =$

4 a. $\frac{53}{100} =$

4 b. $\frac{6}{10} =$

4 c. $\frac{37}{100} =$

5 a. $\frac{2}{10} =$

5 b. $\frac{25}{100} =$

5 c. $\frac{22}{100} =$

6 a. $\frac{58}{100} =$

6 b. $\frac{62}{100} =$

6 c. $\frac{73}{100} =$

7 a. $\frac{34}{100} =$

7 b. $\frac{72}{100} =$

7 c. $\frac{65}{100} =$

DO EVERY OTHER PROBLEM!

Name: _____

Date: _____

Measuring Units Worksheet

Convert.

1 a. 24 ft = _____ yd

1 b. 1 ft = _____ in

2 a. 72 in = _____ ft

2 b. 12 ft = _____ in

3 a. 11 ft = _____ in

3 b. 5 yd = _____ ft

4 a. 33 ft = _____ yd

4 b. 36 ft = _____ yd

5 a. 5 ft = _____ in

5 b. 3 yd = _____ ft

6 a. 1 yd = _____ ft

6 b. 96 in = _____ ft

7 a. 6 ft = _____ yd

7 b. 120 in = _____ ft

8 a. 9 ft = _____ in

8 b. 2 ft = _____ in

9 a. 36 in = _____ ft

9 b. 30 ft = _____ yd

10 a. 18 ft = _____ yd

10 b. 84 in = _____ ft

DO EVERY OTHER PROBLEM!

NAME: _____ DATE: _____

Measuring Units Worksheet

Convert.

1 a. 4 gal = _____ qt

1 b. 20 qt = _____ gal

2 a. 4 C = _____ qt

2 b. 8 C = _____ qt

3 a. 16 C = _____ qt

3 b. 2 gal = _____ qt

4 a. 1 gal = _____ qt

4 b. 12 qt = _____ gal

5 a. 32 qt = _____ gal

5 b. 3 qt = _____ C

6 a. 24 qt = _____ gal

6 b. 28 qt = _____ gal

7 a. 8 C = _____ qt

7 b. 3 gal = _____ qt

8 a. 4 qt = _____ C

8 b. 1 qt = _____ C

9 a. 2 gal = _____ qt

9 b. 2 qt = _____ C

10 a. 32 qt = _____ gal

10 b. 3 qt = _____ C

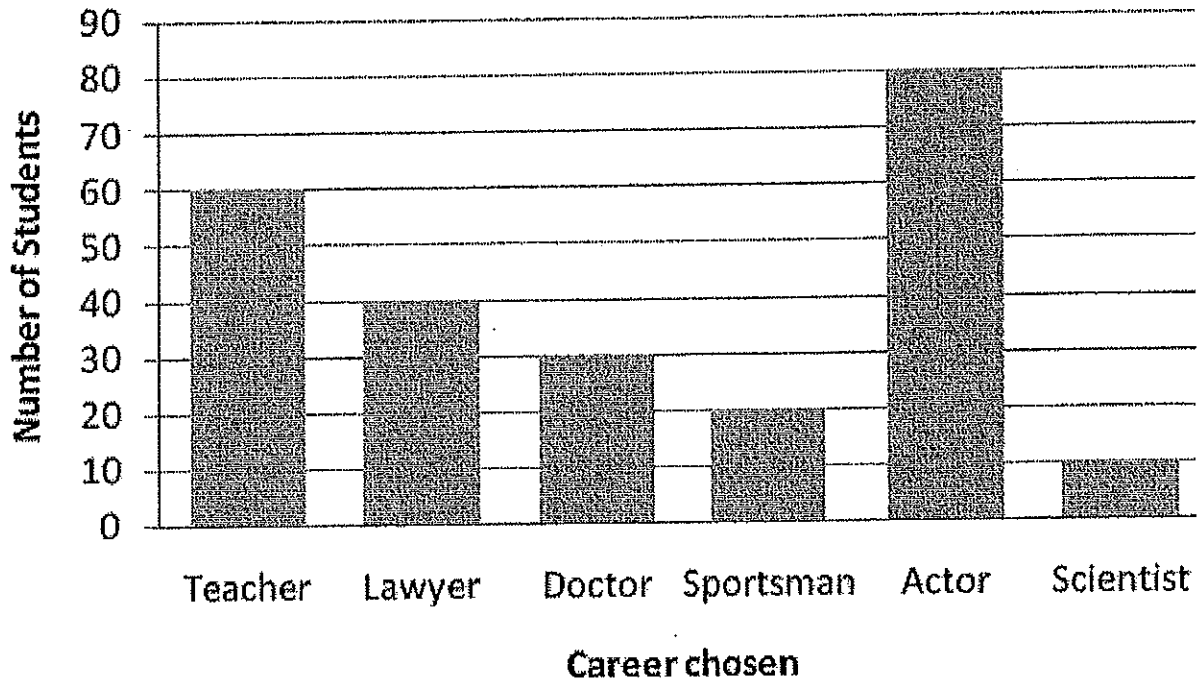
DO EVERY OTHER PROBLEM!

Name _____

Date _____

Careers (Reading Bar Graphs Worksheet)

Career preferences of middle school students



This bar graph shows the career preferences of a group of middle school students. Study the bar graph and answer the following questions.

1. What is the most popular career?
2. What is the least popular career?
3. Which career do 30 students prefer?
4. Name all the career of choices for students. (Hint: There are 6)

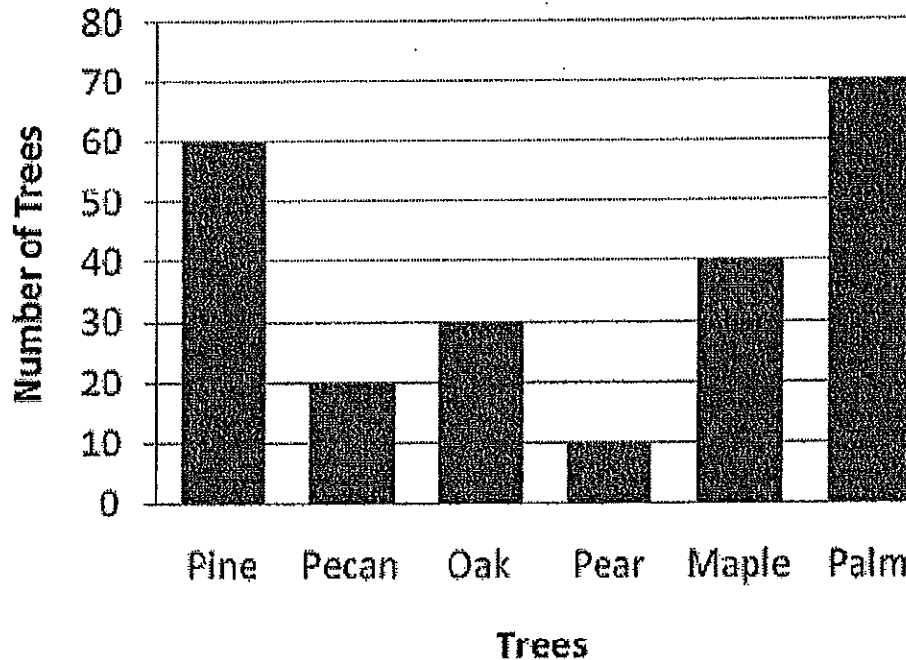
DO EVERY OTHER PROBLEM!

Name _____

Date _____

Types of Planted Trees (Reading Bar Graphs Worksheet)

Trees planted in 2012



Directions: This bar graph shows the number of different types of trees planted in a city in year 2012. Study the bar graph and answer the following questions.

1. How many trees were planted in the city altogether in 2012?
2. How many Palm trees were planted?
3. How many more Maple trees were planted than Pecan trees?
4. How many less Pear trees were planted than Oak trees?

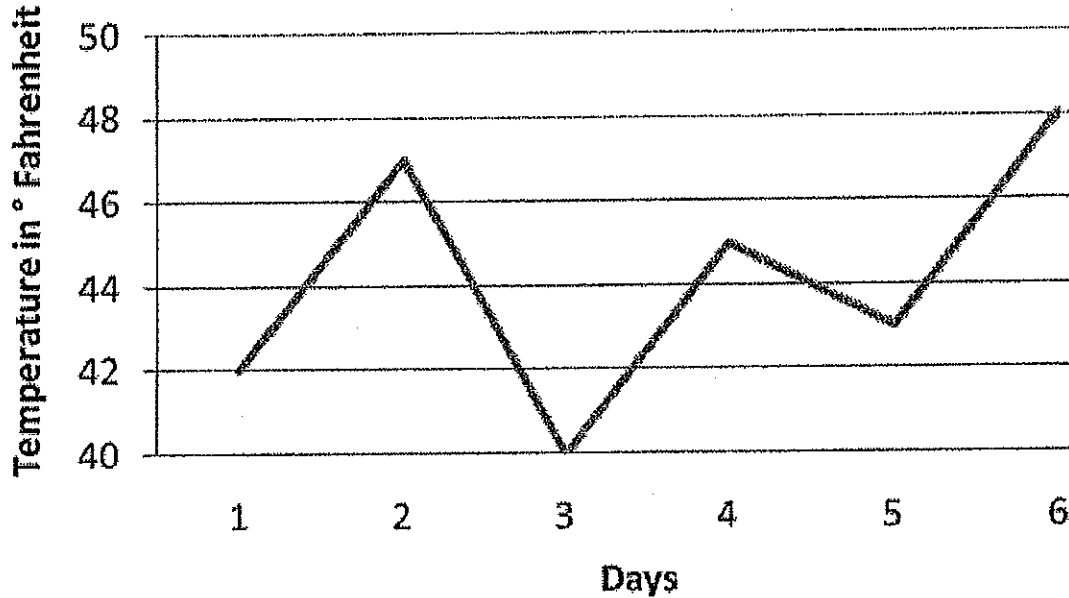
DO EVERY OTHER PROBLEM!

Name _____

Date _____

Reading Line Graphs Temperature Worksheet

Temperatures in California



Directions: The graph above shows daily temperatures for California, recorded for 6 days, in degrees Fahrenheit. Study the line graph and answer the following questions.

1. On which day was the lowest temperature recorded?
2. What was the highest temperature recorded?
3. What was the temperature recorded on day 4?
4. Was the temperature lower or higher on day 4 than day 2?

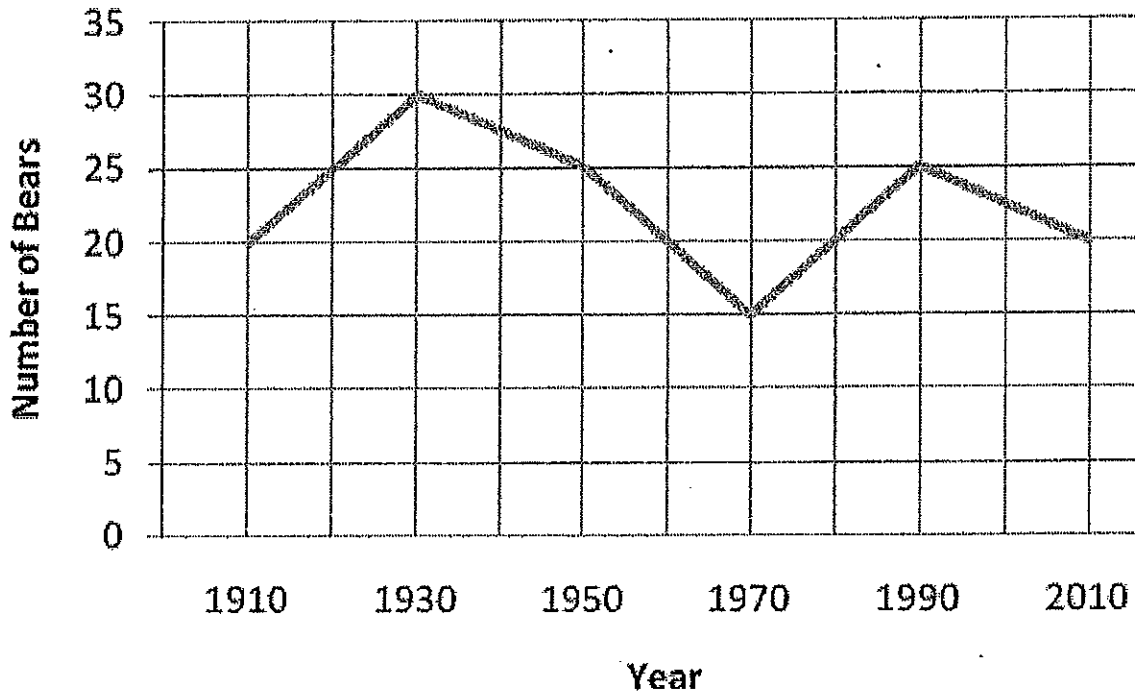
DO EVERY OTHER PROBLEM!

Name _____

Date _____

Reading Line Graphs and The Zoo

Bear population



Directions: The graph above shows the population of bears in a city zoo. Study the line graph and answer the following questions.


1. Did the bear population increase or decrease between 1930 and 1970?
2. Did the bear population increase or decrease between 1910 and 1930?
3. In which year were the number of bears 15?
4. In which year was the population of bears the greatest?

DO EVERY OTHER PROBLEM!

Classifying Angles

Classify each angle as acute, obtuse, right or straight.

1)




Type: _____

2)



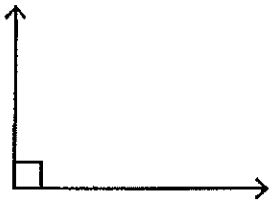
Type: _____

3)



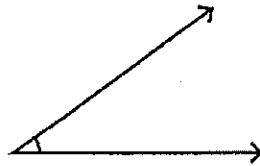
Type: _____

4)



Type: _____

5)




Type: _____

6)



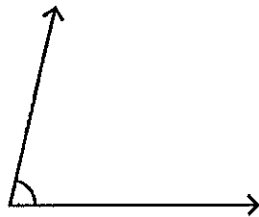
Type: _____

7)



Type: _____

8)



Type: _____

9)



Type: _____

10) 120°

Type: _____

11) 34°

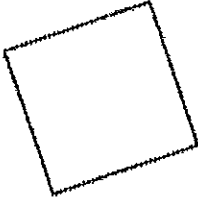
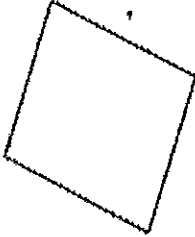
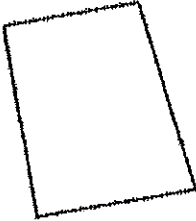
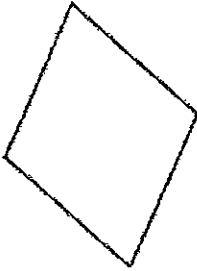

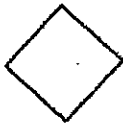
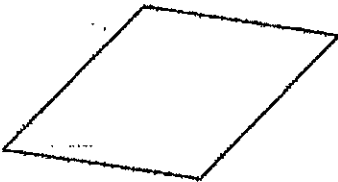

Type: _____

12) 168°

Type: _____

Classify Quadrilaterals Worksheet

Classify (name) the quadrilaterals. DO EVERY OTHER PROBLEM!

1 a. 	1 b. 
2 a. 	2 b. 
3 a. 	3 b. 
4 a. 	4 b. 

SQUARE

WORD BANK

PARALLELOGRAM

RECTANGLE

RHOMBUS

TRAPEZOID