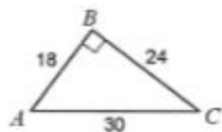
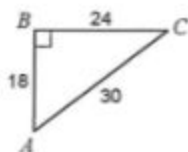
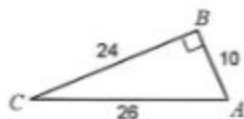
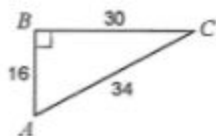
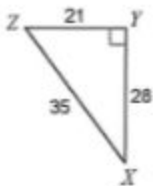
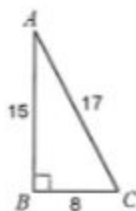
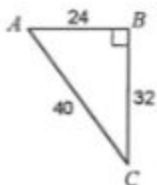
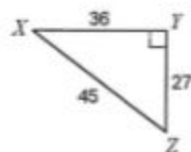
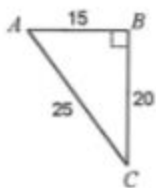


## Trig Worksheet 2.1

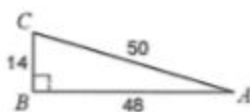
Find the value of each trigonometric ratio.

1)  $\tan C$ 2)  $\cos C$ 3)  $\sin A$ 4)  $\tan X$ 5)  $\sin A$ 6)  $\tan C$ 7)  $\sin X$ 8)  $\cos A$ 9)  $\cos A$ 10)  $\sin X$ 

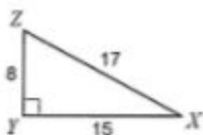
11)  $\cos A$



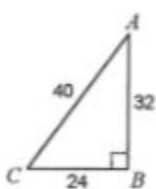
12)  $\sin A$



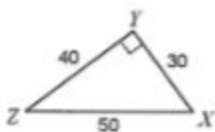
13)  $\tan X$



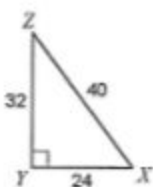
14)  $\cos A$



15)  $\sin X$



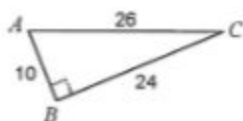
16)  $\sin X$



17)  $\tan Z$



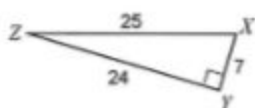
18)  $\tan A$



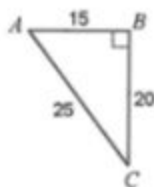
19)  $\cos C$




20)  $\cos Z$



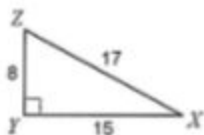
11)  $\cos A$



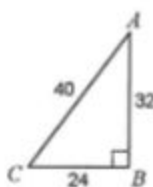
12)  $\sin A$



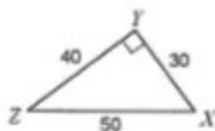
13)  $\tan X$



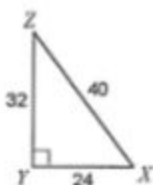
14)  $\cos A$



15)  $\sin X$



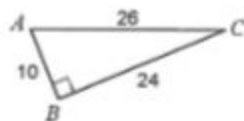
16)  $\sin X$



17)  $\tan Z$



18)  $\tan A$



19)  $\cos C$



20)  $\cos Z$

