



WEBSTER COUNTY SCHOOLS

2<sup>nd</sup> Grade  
At-Home Learning  
Packet

March 23, 2020

Adding With Regrouping St. Patrick's Day Coloring Name: \_\_\_\_\_

**Directions:** Solve the problems. Circle the answer. Once you have answered all of the problems, match the color in the answer choice to the question number on the picture.

#	Math Problem	Choice A	Choice B	Choice C	#	Math Problem	Choice A	Choice B	Choice C
1	$\begin{array}{r} 86 \\ + 58 \\ \hline \end{array}$	134 Gray	1314 Red	144 Dark Blue	11	$\begin{array}{r} 76 \\ + 59 \\ \hline \end{array}$	23 Dark Green	125 Pink	135 Light Green
2	$\begin{array}{r} 36 \\ + 75 \\ \hline \end{array}$	111 Orange	101 Light Green	1011 Yellow	12	$\begin{array}{r} 97 \\ + 78 \\ \hline \end{array}$	165 Purple	21 Pink	175 Gray
3	$\begin{array}{r} 99 \\ + 11 \\ \hline \end{array}$	1010 Purple	110 Dark Green	101 Pink	13	$\begin{array}{r} 58 \\ + 25 \\ \hline \end{array}$	83 Purple	713 Dark Green	73 Orange
4	$\begin{array}{r} 29 \\ + 86 \\ \hline \end{array}$	105 Light Green	115 Pink	1015 Dark Green	14	$\begin{array}{r} 83 \\ + 39 \\ \hline \end{array}$	1212 Red	122 Light Green	112 Dark Blue
5	$\begin{array}{r} 93 \\ + 34 \\ \hline \end{array}$	127 Light Blue	116 Orange	61 Red	15	$\begin{array}{r} 76 \\ + 59 \\ \hline \end{array}$	125 Red	1315 Pink	135 Dark Green
6	$\begin{array}{r} 85 \\ + 86 \\ \hline \end{array}$	161 Light Blue	1611 Red	171 Purple	16	$\begin{array}{r} 97 \\ + 78 \\ \hline \end{array}$	175 Light Blue	1615 Purple	165 Yellow
7	$\begin{array}{r} 95 \\ + 54 \\ \hline \end{array}$	149 Red	41 Yellow	139 Dark Green	17	$\begin{array}{r} 58 \\ + 25 \\ \hline \end{array}$	73 Light Blue	713 Gray	83 Dark Blue
8	$\begin{array}{r} 29 \\ + 61 \\ \hline \end{array}$	90 Gray	810 Light Blue	80 Orange	18	$\begin{array}{r} 74 \\ + 39 \\ \hline \end{array}$	103 Light Green	113 Dark Green	1013 Purple
9	$\begin{array}{r} 75 \\ + 68 \\ \hline \end{array}$	133 Yellow	1313 Pink	143 Light Green	19	$\begin{array}{r} 39 \\ + 62 \\ \hline \end{array}$	91 Yellow	911 Orange	101 Pink
10	$\begin{array}{r} 83 \\ + 48 \\ \hline \end{array}$	121 Dark Blue	131 Yellow	1211 Gray	20	$\begin{array}{r} 55 \\ + 56 \\ \hline \end{array}$	111 Light Blue	1011 Gray	101 Light Green

Adding With Regrouping St. Patrick's Day Coloring Name: \_\_\_\_\_

**Directions:** Solve the problems. Circle the answer. Once you have answered all of the problems, match the color in the answer choice to the question number on the picture.

The page contains the following addition problems:

- Top Left Clover:** 18 + 15 = ?
- Top Middle Clover:** 18 + 15 = ?
- Top Right Clover:** 17 + 17 = ?
- Middle Left Clover:** 6 + 13 = ?
- Middle Right Clover:** 17 + 17 = ?
- Bottom Left Clover:** 4 + 19 = ?
- Bottom Right Clover:** 16 + 20 = ?

The triangles at the bottom contain the following numbers:

11, 3, 18, 15, 18, 15, 18, 15, 14, 11, 14, 11, 14, 11, 14, 11, 14, 15, 3, 11



Name: \_\_\_\_\_

# Say and Spell

Say the name of each picture. Write the word.



c	o	a	t
---	---	---	---



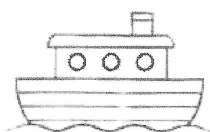
--	--	--	--




--	--	--	--



--	--	--	--



--	--	--	--



--	--	--	--	--



--	--	--	--	--



--	--	--



Name: \_\_\_\_\_

# Alphabetical Order

Write these words in alphabetical order. For more fun, write each word on a sticky note. Have a family member hide them, and you can try to find them and read them.

Handwriting practice lines consisting of solid top and bottom lines with a dashed middle line, repeated ten times for writing the words.

push

because

which

tried

people

should

does

Name: \_\_\_\_\_

# Missing Apostrophes


Read each sentence. Fill in the missing apostrophes.

1. I think that Marys kite is the best!
2. Spring isnt my favorite season, but I still love it!
3. Im going to ride my bike to Tims house.
4. Are we going to take Moms or Dads car to the park?
5. We cant play outside today because its raining.
6. This is my friends picnic blanket.
7. Dont step on a worm!

Name: \_\_\_\_\_ Date: \_\_\_\_\_

If you could have any pet, which pet would you choose?  
Why? (Give at least two reasons.)

Handwriting practice lines consisting of solid top and bottom lines with a dashed middle line. The page contains 10 full-width sets of these lines, followed by a shorter set of lines on the left side of the bottom right section.


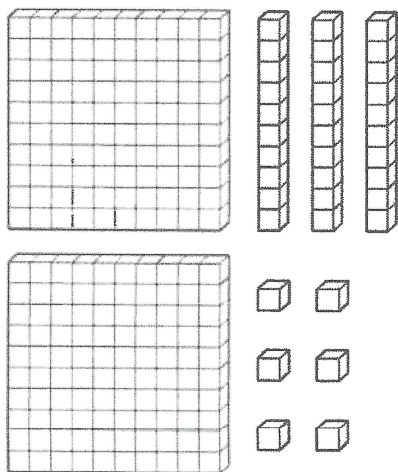
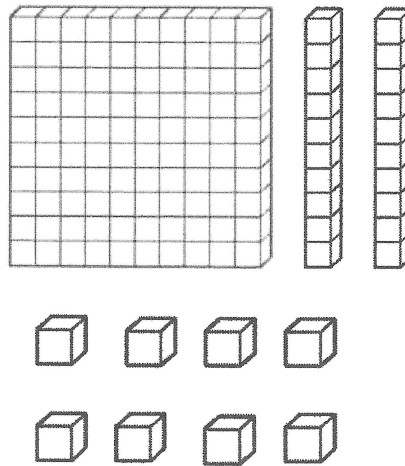
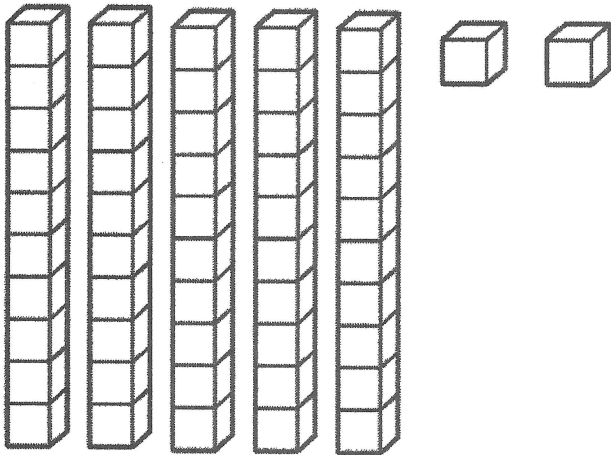
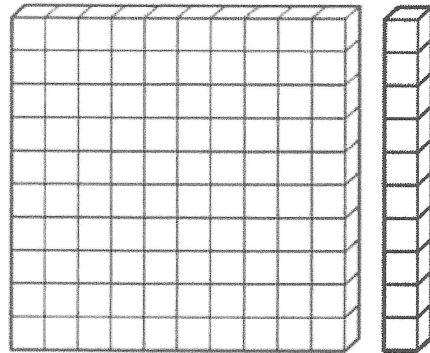





Name: \_\_\_\_\_

# How Many?

Write the number of blocks.



Name: \_\_\_\_\_

# Inequalities

Fill in the  $>$ ,  $<$ , or  $=$  sign.

$117 \square 17$

$85 \square 58$

$101 \square 101$

$97 \square 68$

$125 \square 225$

$321 \square 299$

$854 \square 798$

$462 \square 375$

$141 \square 443$

$178 \square 116$


$967 \square 967$

$359 \square 512$


Name: \_\_\_\_\_

# Telling Time


Write the time on each clock.




\_\_\_\_\_




\_\_\_\_\_




\_\_\_\_\_



\_\_\_\_\_



\_\_\_\_\_



\_\_\_\_\_

Write the time, plus A.M. or P.M.

When do you eat dinner?

\_\_\_\_\_

When do you go to bed?

\_\_\_\_\_

When do you eat breakfast?

\_\_\_\_\_



Name: \_\_\_\_\_

# Adding & Subtracting Tens & Hundreds

$352 + 10 =$

$167 - 100 =$

$646 + 100 =$

$327 - 100 =$

$158 + 10 =$

$374 - 10 =$

$172 + 10 =$

$594 - 100 =$

$800 + 100 =$

$733 - 10 =$

$354 + 10 =$

$550 - 100 =$

$247 + 100 =$

$999 - 10 =$

$234 - 100 =$

$123 + 10 =$

$498 + 10 =$

$652 + 100 =$

Name: \_\_\_\_\_

# Spring Word Problems

Solve each problem. Show your work.

In the forest, there were 17 oak trees, 23 pine trees, and 8 maple trees. How many trees were there in all?

There were 56 birds sitting on the fence. Then, 22 birds flew away. How many birds are left?

Mike planted 35 seeds. Maddy planted 26 seeds. How many fewer seeds did Maddy plant than Mike?

There were 24 kids sailing boats at the pond. Then, 8 more kids came. Later, 9 kids left. How many kids are still sailing boats?