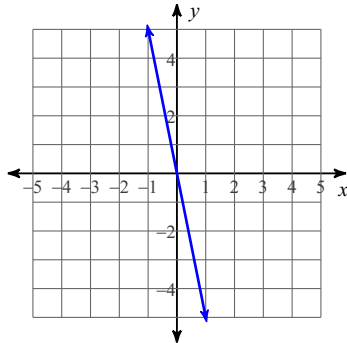


NTI Day 9

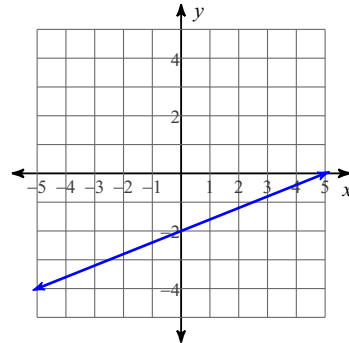
Date _____ Period _____

Write the slope-intercept form of the equation of each line.

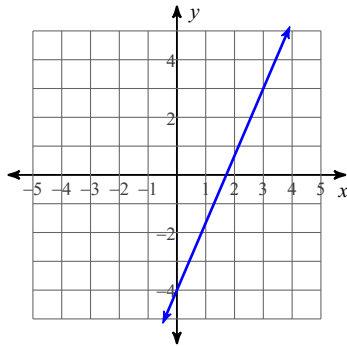
1)



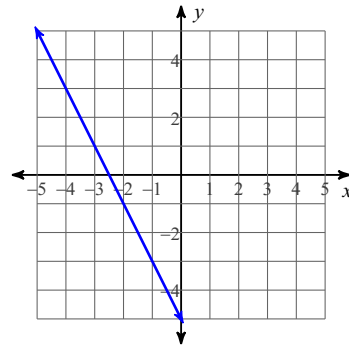
2)



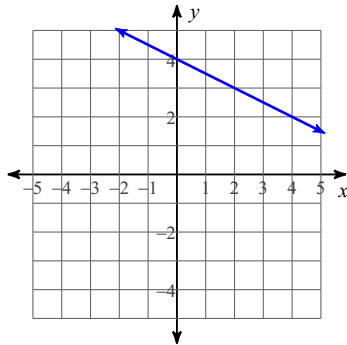
3)



4)



5)

**Write the slope-intercept form of the equation of the line through the given point with the given slope.**

6) through: $(-3, 2)$, slope $= -\frac{7}{3}$

7) through: $(-3, 1)$, slope $= \frac{2}{3}$

8) through: $(2, 5)$, slope $= 2$

9) through: $(5, -1)$, slope $= -1$

10) through: $(2, 0)$, slope $= \frac{3}{2}$