

**NTI DAY 10**

**READ YOUR READING  
BOOK And SIGN!**

**Parent Signature**

---

Name: \_\_\_\_\_

## ELA BUZZ



Circle the **small** animal.



Color the sentence that is correct.

We saw a lion at the zoo.

we saw a Lion at the zoo.

Circle the vowel.

c u b

Lions are big cats. They are very strong. They have a loud roar.

Some lions live in Africa. Some live in India. Lions live in groups. The groups are called prides. A pride may have 15 lions.

Male lions have long hair around the head. This is called a mane. Only males have manes. Baby lions are called cubs.



1. True or false: A lion's roar is quiet. \_\_\_\_\_
2. A group of lions is called a \_\_\_\_\_.
3. Do mother lions have manes?    a. yes    b. no

Name: \_\_\_\_\_



# ELA BUZZ





Sort the words by the number of syllables.

penny      nickel      dime      cent

*1 syllable*

*2 syllables*



**Synonyms** are words with the same or nearly the same meaning. Draw lines to match the synonyms.

**big** •

• **little**

**kind** •

• **large**

**small** •

• **nice**

Circle the question mark.

Underline the period.


Draw a square around the exclamation point.

•      !      ?

Circle the sentence that is correct.

Mom and I went shopping.

Mom and i went shopping.

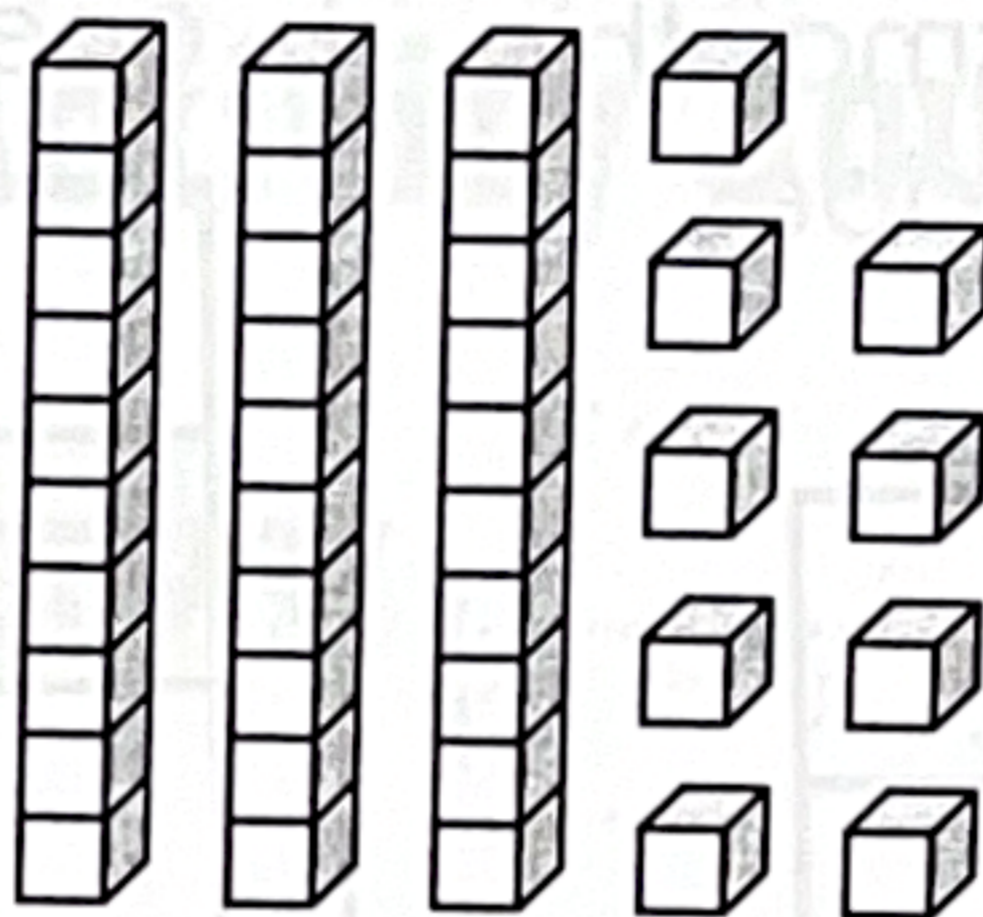
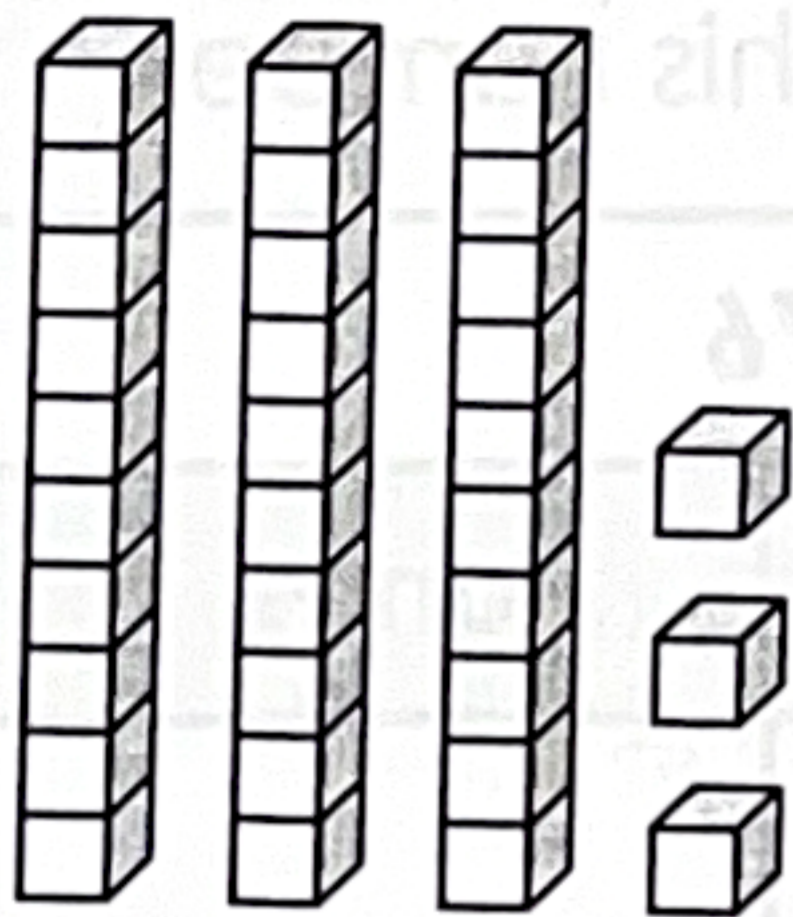


Name: \_\_\_\_\_



# Math Buzz

Compare.



\_\_\_\_\_ is less than \_\_\_\_\_

\_\_\_\_\_ < \_\_\_\_\_

What time is shown on the clock?



Solve.

$$\begin{array}{r} 10 \\ + 3 \\ \hline \end{array}$$

$$\begin{array}{r} 13 \\ - 10 \\ \hline \end{array}$$

Fill in the tallies to complete the chart.

Laps Ran		
Name	Total	Tallies
Lindsay	5	
Daniel	8	
Nick	4	

How many more laps did Daniel run than Nick? \_\_\_\_\_

Name: \_\_\_\_\_



# Math Buzz

Lucy had 12 blueberries.  
She used 8 to make a smoothie.  
How many blueberries does  
Lucy have left?

?	8
12	

answer: \_\_\_\_\_ blueberries

Write how many tens and  
ones make this number.

76	
tens	ones

Add.

$$4 + 9 + 7 = \underline{\quad}$$

This month is \_\_\_\_\_.

Color today's date.

1	2	3	4	5	6	7
8	9	10	11	12	13	14
15	16	17	18	19	20	21
22	23	24	25	26	27	28
29	30	31				

Name: \_\_\_\_\_

Week of: \_\_\_\_\_

# PE Activity Journal

**ACTIVITY**

**DURATION**

**ACTIVITY**

**DURATION**

**ACTIVITY**

**DURATION**

**ACTIVITY**

**DURATION**

**ACTIVITY**

**DURATION**