


DAY

7



Name: \_\_\_\_\_

~~Writing About Reading~~

~~On the back, write to explain how the arctic fox is able to survive in cold weather. Use specific examples from your text to support your answer!~~

Arctic Fox

The arctic fox is a small mammal that lives in Greenland and Russia. Its fur is bright white during the winter and turns brown during the spring and summer. Their changing color fur helps them to blend in with their surroundings and keeps them safe from predators. The temperature is very cold where the arctic fox lives. It's a good thing the fox is used to this weather! They are covered in a wonderful fur coat that has many different layers. Each layer does a good job at keeping the fox warm and dry. A thick layer of fat also helps keep the fox warm on bone chilling days. Food is sometimes hard to find in the cold weather, but the arctic fox can still locate mice, birds and even fish to eat. Baby arctic foxes are called kits. A female arctic fox can have up to 5 kits at a time. The whole fox family stays safe inside their underground den. The den can have many tunnels. The tunnels in the den may have been there for many years and used by many fox families. The arctic fox is not endangered. Hopefully, it will be around for many more years!


Underline the part in the text that supports your answer.

1. What do the words bone chilling mean in this passage?

2. Where in the world does the arctic fox live?

3. Baby foxes are called \_\_\_\_\_.

4. Based on the text, draw what you think an arctic fox den looks like.



Name: \_\_\_\_\_

Date: \_\_\_\_\_

# \_\_\_\_\_

Add:


1.  $62 + 27 =$  \_\_\_\_\_

2.  $81 + 29 =$  \_\_\_\_\_

Subtract:

3.  $49 - 26 =$  \_\_\_\_\_

4.  $98 - 69 =$  \_\_\_\_\_




5. Find the difference between 47 and 53?



6. Count by 100s. Which number comes next?

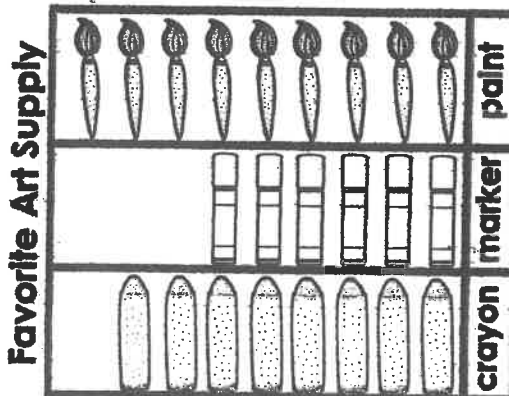
300, 400, 500, 600, \_\_\_\_\_

7. How many quadrilaterals?



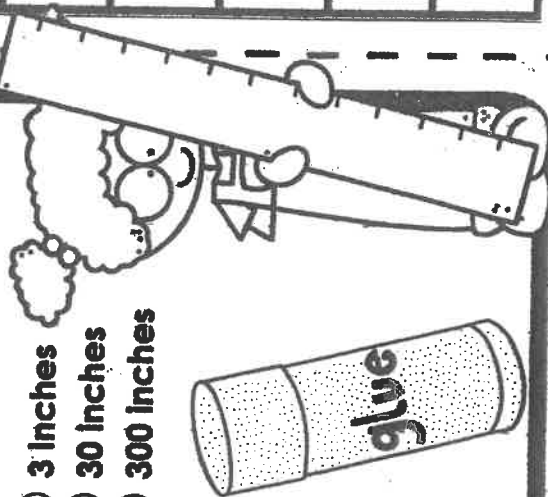
8. Tim has 89 stickers. Maya has 24 fewer stickers than Tim. How many stickers does Maya have?

9. How many more students would rather paint than use crayons?



10. Which is the best estimate for the length of a glue stick?

- (A) 3 inches
- (B) 30 inches
- (C) 300 inches



#	answer
1	
2	
3	
4	
5	
6	
7	
8	
9	
10	

